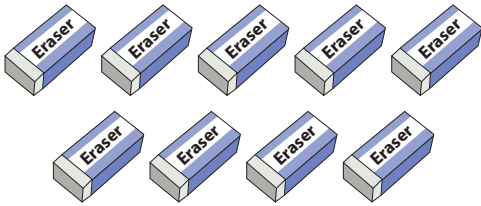


# Addition within 20

## Answer Key

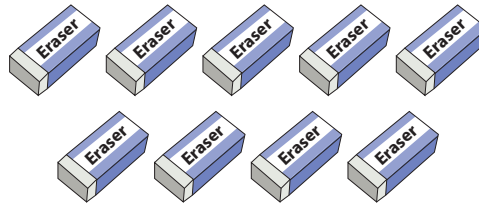
Count the pictures and write the addition sentence to represent each model.

1)



9

+

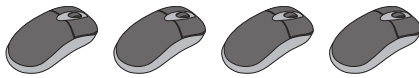


9

=

18

2)



4

+

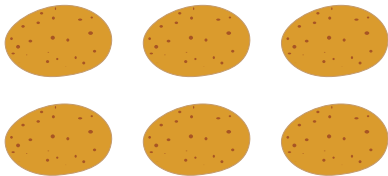


3

=

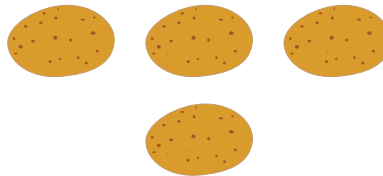
7

3)



6

+




4

=


10

4)



8

+



5

=


13

5)



1

+



2

=

3