


Addition within 20

Answer Key

Count the pictures and write the addition sentence to represent each model.

1)



+



7

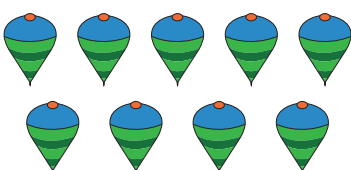
+

1

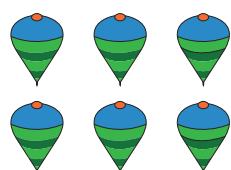
=

8

2)



+



9

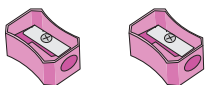
+

6

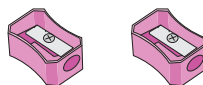
=

15

3)



+



2

+

2

=

4

4)



+



10

+

6


=

16

5)



+



3

+

7

=

10