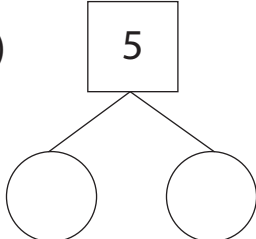


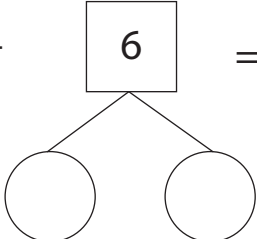
Make Ten and Add

Split up the highlighted number and find the sum using the making 10 addition strategy.

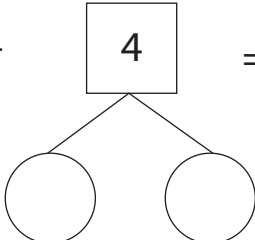
1) $\boxed{5} + 8 = \underline{\quad}$



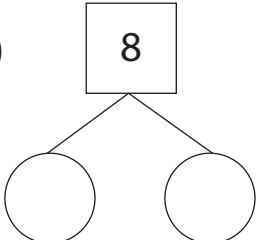
2) $9 + \boxed{6} = \underline{\quad}$



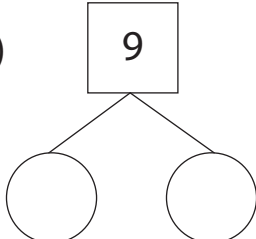
3) $7 + \boxed{4} = \underline{\quad}$



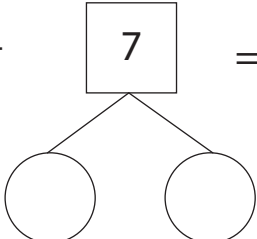
4) $\boxed{8} + 6 = \underline{\quad}$



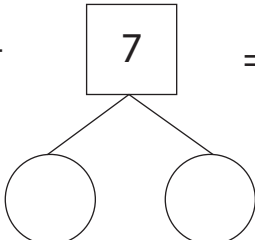
5) $\boxed{9} + 9 = \underline{\quad}$



6) $5 + \boxed{7} = \underline{\quad}$



7) $6 + \boxed{7} = \underline{\quad}$



8) $\boxed{8} + 9 = \underline{\quad}$

