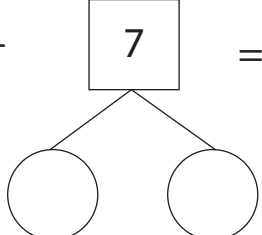


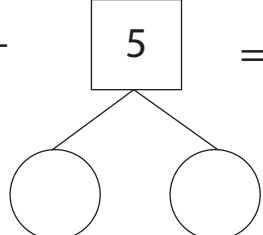
Make Ten and Add

Split up the highlighted number and find the sum using the making 10 addition strategy.

1) $8 + \boxed{7} = \underline{\quad}$



2) $7 + \boxed{5} = \underline{\quad}$



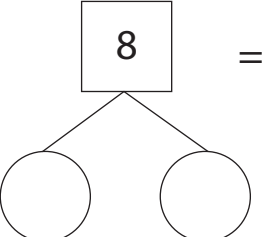
Preview

Become a member to unlock
unrestricted access to both printable
and online worksheets.



www.tutoringhour.com

7) $8 + \boxed{8} = \underline{\quad}$



8) $6 + \boxed{9} = \underline{\quad}$

