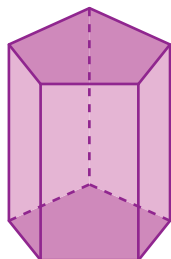


Naming Prisms and Pyramids | MCQ

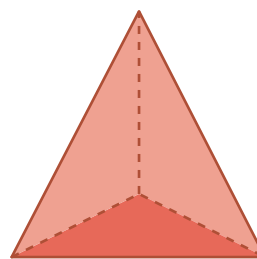
Check the option that describes each prism and pyramid.

1



- Hexagonal prism

2



- Triangular pyramid

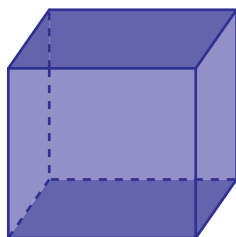
Preview

Become a member to unlock
unrestricted access to both printable
and online worksheets.



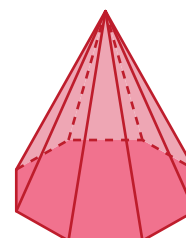
www.tutoringhour.com

5



- Cube
- Rectangular pyramid
- Pentagonal pyramid

6



- Pentagonal pyramid
- Hexagonal pyramid
- Octagonal pyramid