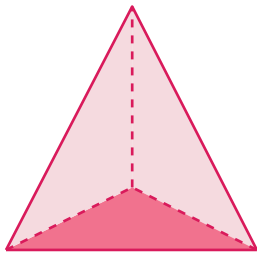


Naming Prisms and Pyramids | MCQ

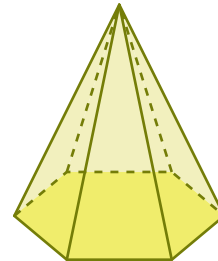
Check the option that describes each prism and pyramid.

1



- Triangular pyramid

2



- Pentagonal pyramid

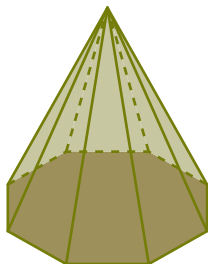
Preview

Become a member to unlock
unrestricted access to both printable
and online worksheets.



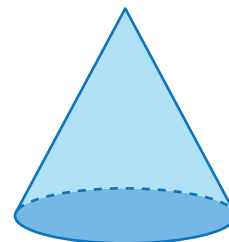
www.tutoringhour.com

5



- Triangular prism
- Octagonal pyramid
- Rectangular pyramid

6



- Cone
- Pentagonal pyramid
- Triangular prism