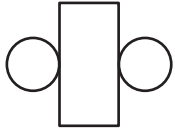


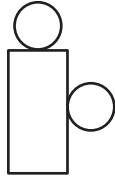
Multiple Nets of 3D Shapes

1 Spot the nets that form a cylinder.

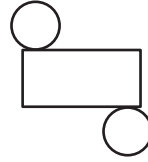
a)



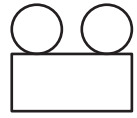
b)



c)



d)



2

Preview

Become a member to unlock
unrestricted access to both printable
and online worksheets.



www.tutoringhour.com

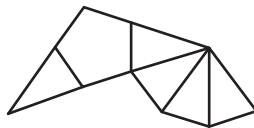
3

4 Check the nets that can be folded to form a pentagonal pyramid.

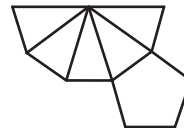
a)



b)



c)



d)

