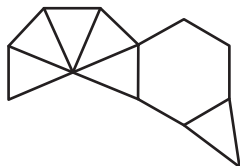


Multiple Nets of 3D Shapes

1 Spot the nets that can be assembled into a hexagonal pyramid.


a)



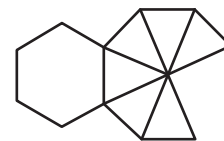
b)



c)



d)



2

Preview

Become a member to unlock
unrestricted access to both printable
and online worksheets.

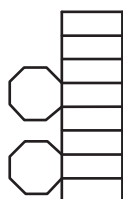
3

www.tutoringhour.com

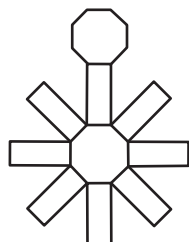


4 Check the nets that can be folded into a octagonal prism.

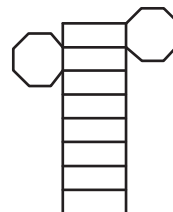
a)



b)



c)



d)

