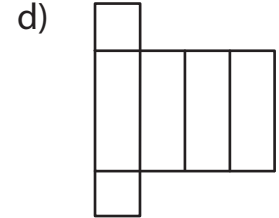
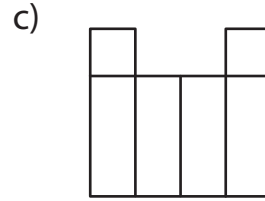
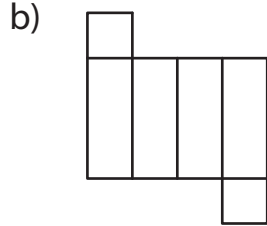
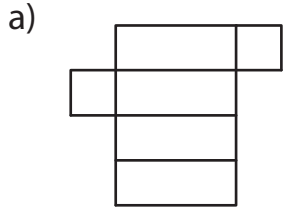


Multiple Nets of 3D Shapes

1 Check the nets that can be folded to form a rectangular prism.



2

Preview

Become a member to unlock
unrestricted access to both printable
and online worksheets.



www.tutoringhour.com

3

4 Spot the nets that form a cone.

