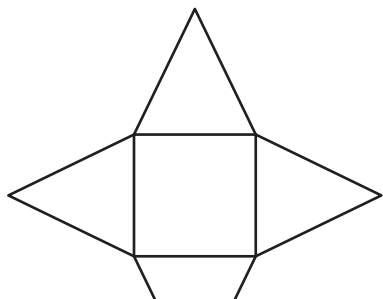


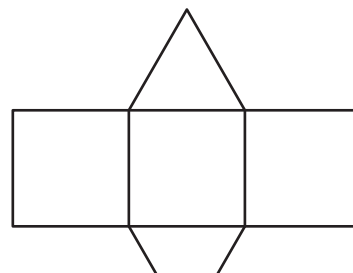
3D Shapes and Nets

Name the 3D shape formed by each net.

1)



2)



3)

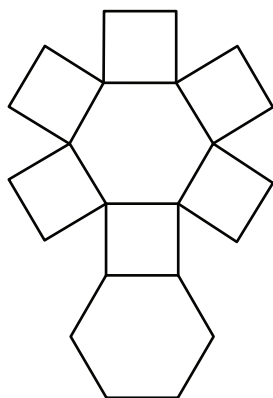
Preview

**Become a member to unlock
unrestricted access to both printable
and online worksheets.**



www.tutoringhour.com

5)



6)

