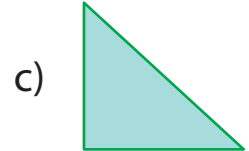

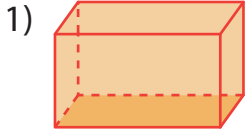


# Identifying Faces of 3D Shapes

A) Identify and check the 2D shape in each solid figure.



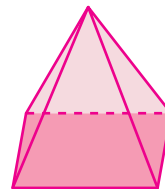
## Preview

Become a member to unlock  
unrestricted access to both printable  
and online worksheets.



B) 1 [www.tutoringhour.com](http://www.tutoringhour.com) No

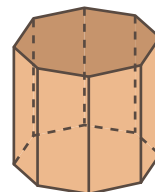
2) Does this shape have 6 faces?



Yes

No

3) Does this shape have a octagon as one  
of its faces?



Yes

No