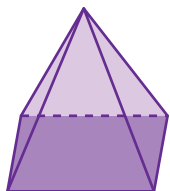


Identifying Faces of 3D Shapes

A) Identify and check the 2D shape in each solid figure.


1)




a)



b)



c)



Preview

Become a member to unlock
unrestricted access to both printable
and online worksheets.



B) 1

www.tutoringhour.com

No

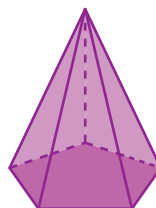
2) Does this shape have a hexagon as one of its faces?



Yes

No

3) Does this shape have 8 faces?



Yes

No