

# Faces, Edges, and Vertices

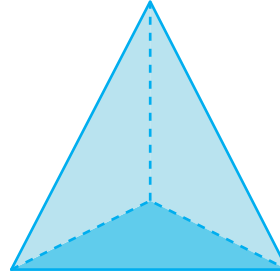
Write the number of faces, edges, and vertices and identify each 3D shape.

1)



Faces	
Edges	
Vertices	

2)



Faces	
Edges	
Vertices	

## Preview

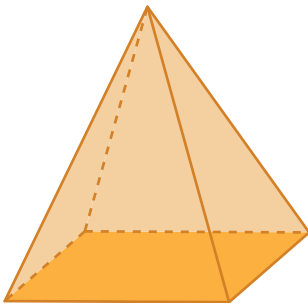
Become a member to unlock  
unrestricted access to both printable  
and online worksheets.



www.tutoringhour.com

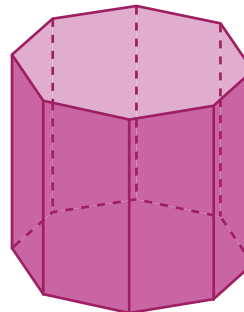
3)

5)



Faces	
Edges	
Vertices	

6)



Faces	
Edges	
Vertices	

Name: \_\_\_\_\_

Name: \_\_\_\_\_