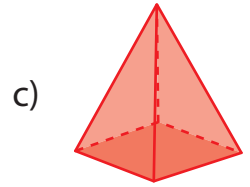
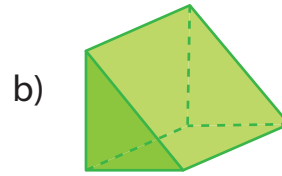
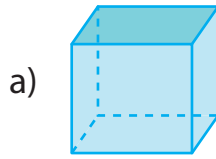


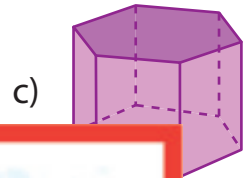
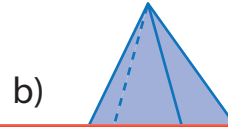
Comparing Faces, Edges, and Vertices

A) Choose the correct shape to answer each question.

1) Which shape has the most vertices?



2) Which shape has



B)

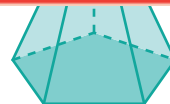
Preview

Become a member to unlock
unrestricted access to both printable
and online worksheets.

www.tutoringhour.com



Number of vertices: _____



Number of vertices: _____

a) Which shape has 12 vertices? _____

b) Which shape has the most faces? _____

c) Which shape has the fewest edges? _____