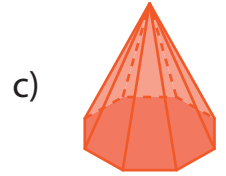
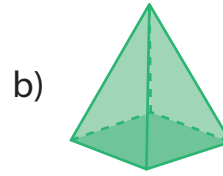
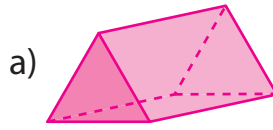


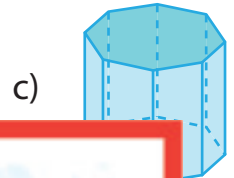
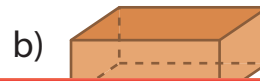
Comparing Faces, Edges, and Vertices

A) Choose the correct shape to answer each question.

1) Which shape has the fewest edges?



2) Which shape has



B)

Preview

Become a member to unlock unrestricted access to both printable and online worksheets.

www.tutoringhour.com



Number of vertices: _____



Number of vertices: _____

a) Which shape has the most vertices?

b) Which shape has the fewest edges?

c) Which shape has 6 faces?
