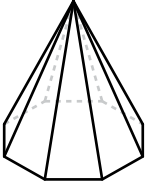
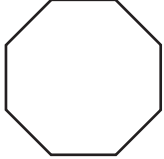



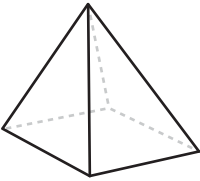



## Identifying Horizontal and Vertical Cross Sections

Determine whether the slicing of each 3D shape results in a horizontal or vertical cross section and check appropriately.

Shapes	Cross Section	Horizontal Slicing	Vertical Slicing
1) 			
2)	<div style="border: 2px solid red; padding: 10px;"> <h1 style="color: blue; font-size: 2em;">Preview</h1> <p style="color: blue; font-size: 1.2em; margin-top: 10px;">Become a member to unlock unrestricted access to both printable and online worksheets.</p> <p style="text-align: center; color: blue; font-size: 1.1em;">www.tutoringhour.com</p>  </div>		
3)			
4)			
5) 			
6) 			
7) 