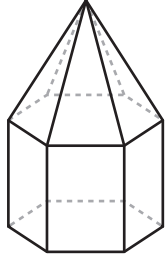


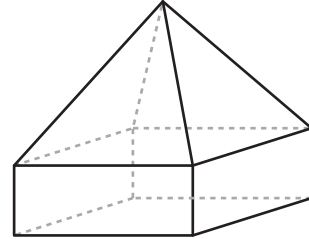
3D Shapes in Composite Figures

Identify and name the 3D shapes in each composite figure.

1



2



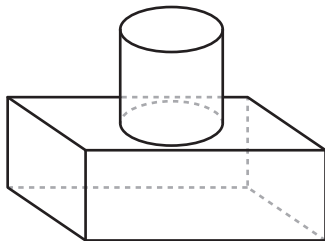
Preview

Become a member to unlock
unrestricted access to both printable
and online worksheets.



www.tutoringhour.com

5



6

