


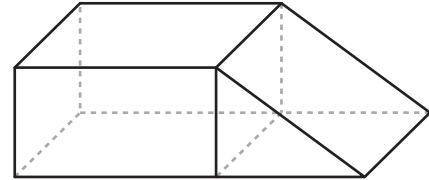
# 3D Shapes in Composite Figures

Identify and name the 3D shapes in each composite figure.

1



2



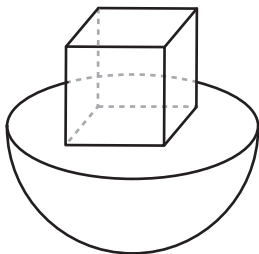
## Preview

Become a member to unlock  
unrestricted access to both printable  
and online worksheets.



[www.tutoringhour.com](http://www.tutoringhour.com)

5

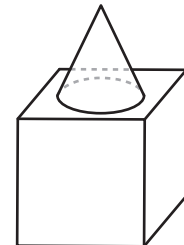



---



---

6




---



---