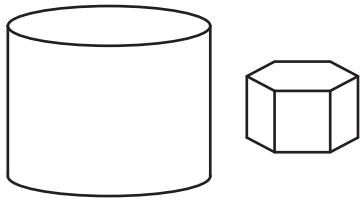


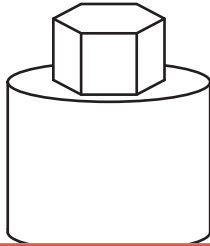
Combining 3D Shapes

Check the shape formed by composing each set of shapes.

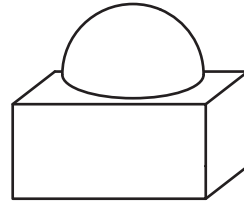
1)



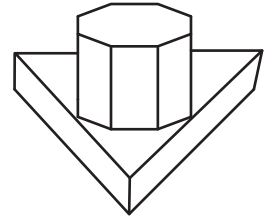
a)



b)



c)



2)

Preview

Become a member to unlock
unrestricted access to both printable
and online worksheets.


www.tutoringhour.com



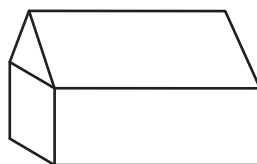
3)



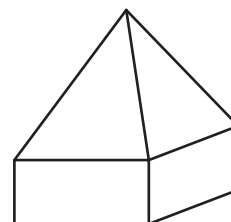
4)



a)



b)



c)

