


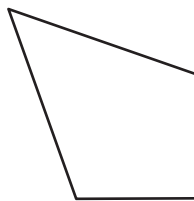
Naming Quadrilaterals

Identify and name each quadrilateral.

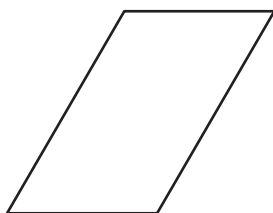
1)



2)



3)



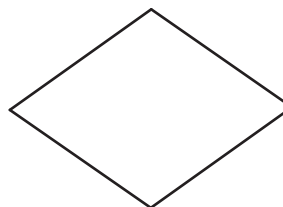
4)



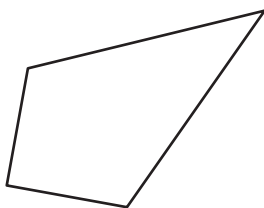
5)



6)



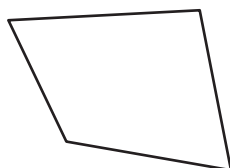
7)



8)



9)



10)

