

# Naming Quadrilaterals


Identify and name each quadrilateral.

1)



\_\_\_\_\_

2)



\_\_\_\_\_

3)

# Preview

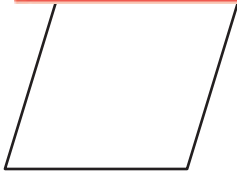
Become a member to unlock  
unrestricted access to both printable  
and online worksheets.




www.tutoringhour.com

5)

7)

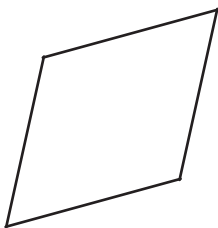


\_\_\_\_\_



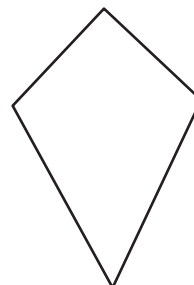
\_\_\_\_\_

9)



\_\_\_\_\_

10)



\_\_\_\_\_