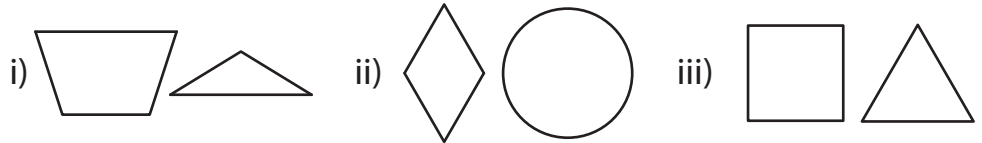
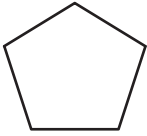


Composing and Decomposing 2D Figures | MCQ

1) Choose the pair of 2D shapes the given figure can be decomposed into.



2) Choose the figure the given pair of 2D shapes can be composed into.

Preview

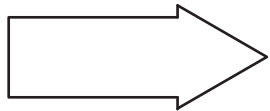
Become a member to unlock
unrestricted access to both printable
and online worksheets.

www.tutoringhour.com



3) C

4) C



5) Choose the figure the given pair of 2D shapes can be composed into.

