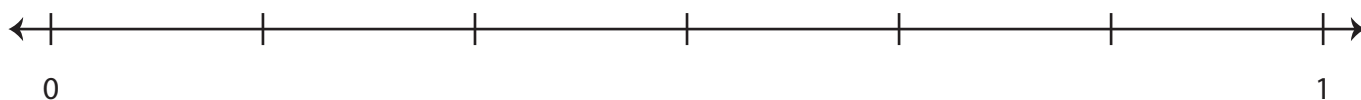


Equivalent Fractions | Number Line

Fill in the number line and complete each equivalent-fraction sentence.

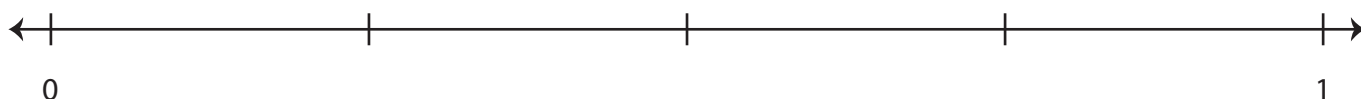
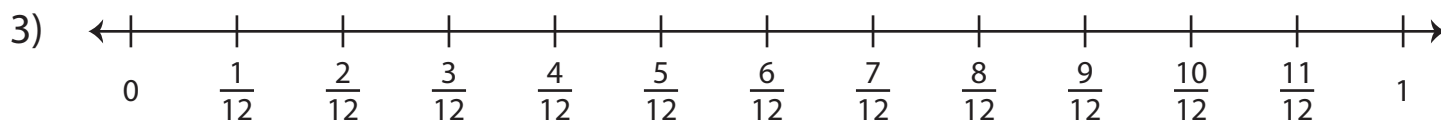


Preview

Become a member to unlock
unrestricted access to both printable
and online worksheets.



www.tutoringhour.com



i) $\frac{3}{12} =$ _____

ii) $\frac{9}{12} =$ _____