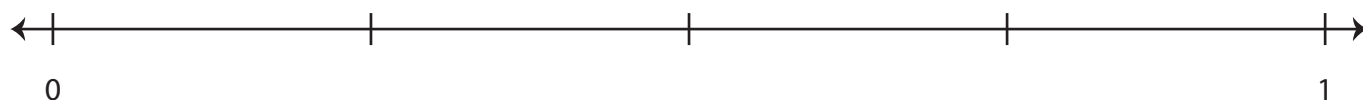
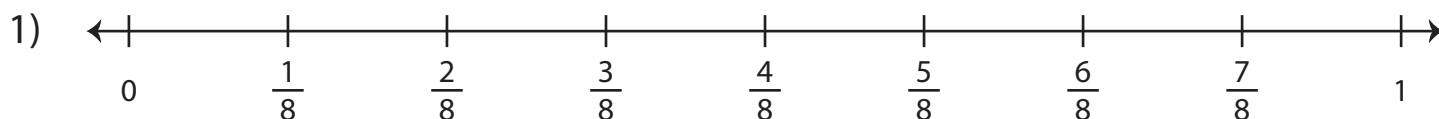


# Equivalent Fractions | Number Line

Fill in the number line and complete each equivalent-fraction sentence.

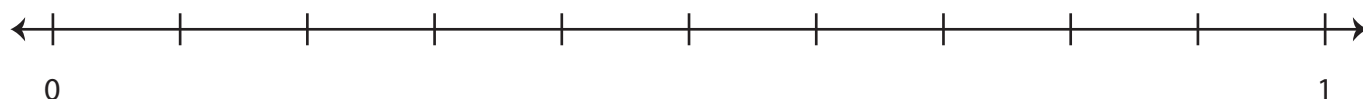


## Preview

Become a member to unlock  
unrestricted access to both printable  
and online worksheets.



[www.tutoringhour.com](http://www.tutoringhour.com)



i)  $\frac{1}{5} =$  \_\_\_\_\_

ii)  $\frac{3}{5} =$  \_\_\_\_\_