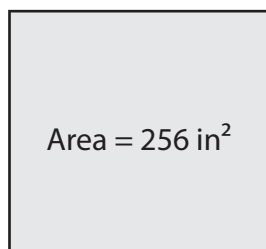


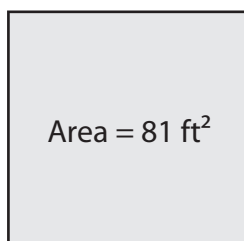
# Side Length of a Square

Find the side length of each square using the given area.

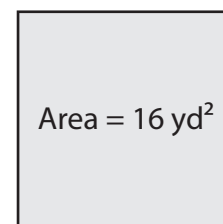
1)



2)



3)



Side

# Preview

4)

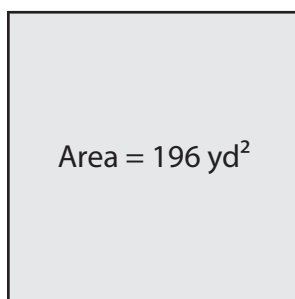
Become a member to unlock  
unrestricted access to both printable  
and online worksheets.



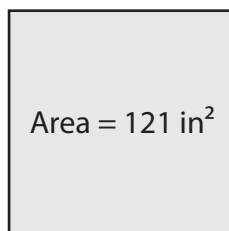
Side

[www.tutoringhour.com](http://www.tutoringhour.com)

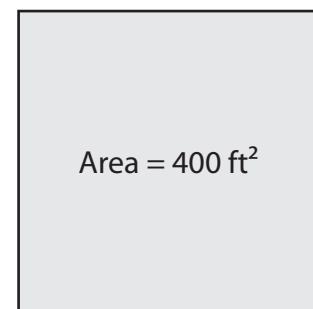
7)



8)



9)



Side length = \_\_\_\_\_

Side length = \_\_\_\_\_

Side length = \_\_\_\_\_