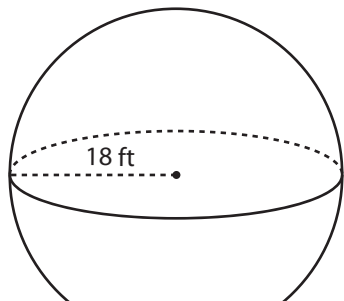


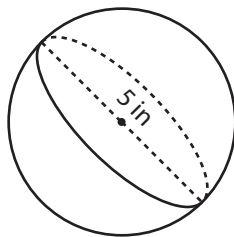
# Surface Area of a Sphere

Find the surface area of each sphere. (Use 3.14 for  $\pi$ .)

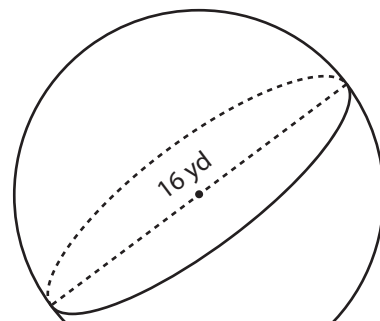
1)



2)



3)



## Preview

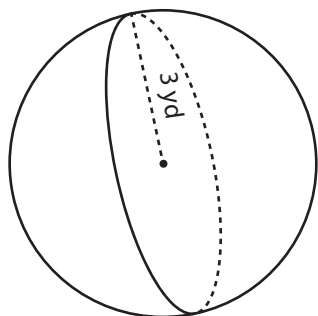
4)

Become a member to unlock  
unrestricted access to both printable  
and online worksheets.

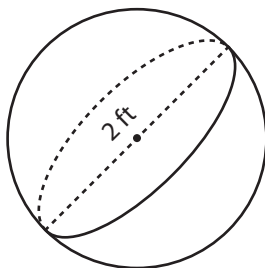


[www.tutoringhour.com](http://www.tutoringhour.com)

7)



8)



9)

