




# Landforms

Observe the grid and use the key to answer the questions.

6						
5						
4						
3						
2						
1						

key  
 island

## Preview

Become a member to unlock  
unrestricted access to both printable  
and online worksheets.



1) Name the two landforms that occupy row 4. e ?

[www.tutoringhour.com](http://www.tutoringhour.com)

2) Name the two landforms that occupy row 4.

3) Write the name of the landform in block (E,3).

4) In which block is the volcano located?

6) In which block is the island located?

7) Which landform is located just to the left of block (E,5)?

8) Name the two landforms that occupy column F.